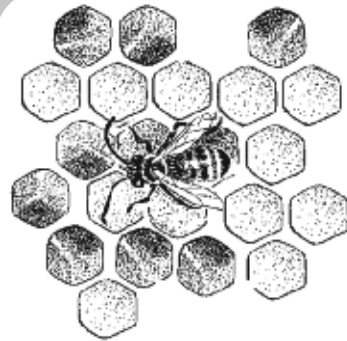


# 12

Wax honeycombs are 6-sided cells with strong, thin walls.

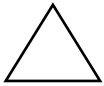


**Count by 10's from 5 to 105.**



**Practice your G and H flash cards for 5 minutes.**

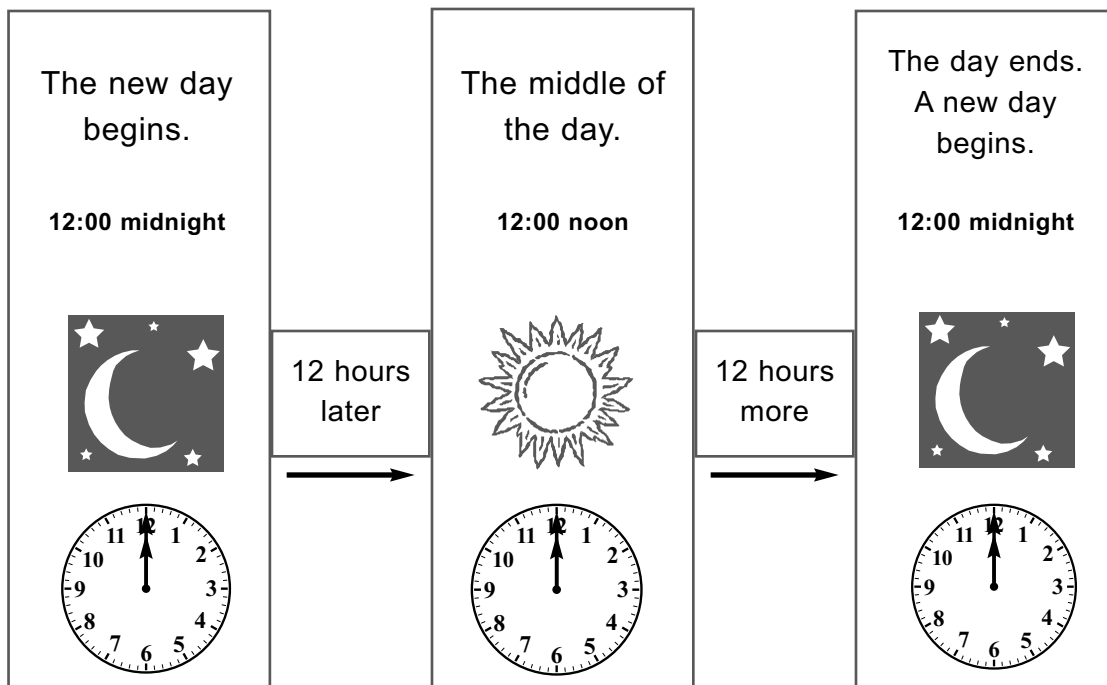
**Do Speed Drill 12 on page 83.**



**Record your score in the graph on page 77.**

## One Day Is 24 Hours

NEW



NEW

## Lesson 12

Midnight to noon is 12 hours.

Noon to the next midnight is 12 more hours.

**One day is 24 hours.**

$$\begin{array}{r} 12 \text{ hours} \\ + 12 \text{ hours} \\ \hline 24 \text{ hours} \end{array}$$

 Ask your teacher for help before you do the next exercise.

Mark the correct answer.

1. A day begins at  12:00 midnight  12:00 noon
2. From midnight to noon is  12 hours  24 hours
3. One day is  12 hours  24 hours

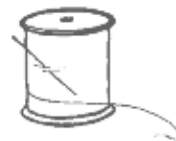


### We Remember



4. Grandma had 225 yards of thread on a spool. If she has already used 114 yards of it on a quilt, how much of the thread is left on the spool?

     yards



Solution

$$\begin{array}{r} 225 \\ - 114 \\ \hline 111 \end{array}$$

5.

$$\begin{array}{r} 418 \\ - 301 \\ \hline \boxed{\phantom{00}} \end{array}$$

$$\begin{array}{r} 137 \\ + 420 \\ \hline \boxed{557} \end{array}$$

$$\begin{array}{r} 59 \\ - 39 \\ \hline \boxed{20} \end{array}$$

$$\begin{array}{r} 43 \\ + 42 \\ \hline \boxed{85} \end{array}$$

$$\begin{array}{r} 5 \\ 1 \\ 2 \\ + 3 \\ \hline \boxed{\phantom{00}} \end{array}$$

6.

618
- 15
603

322
+ 15
337

33
+ 84
117

1
24
+ 17
41



7.

11
- 8
3

11
- 4
7

4
+ 7
11

6
+ 4
10

8
+ 3
11

10
- 6
4

11
- 7
4

3
+ 8
11

Write  $<$ ,  $>$ , or  $=$ .

8.  $11 \boxed{=} 8 + 3$

9.  $15 \boxed{>} 13 + 1$

10.  $9 \boxed{=} 6 + 3$

Fill in the blanks.

11. 1 pint = 2 cups

12. 1 quart = 4 cups

13. 1 foot = 12 inches

Follow the instructions.

14. Measure the rope. It is 4 inches long.



15. Measure the bar with centimeters. It is 8 centimeters long.



16. Circle the addends.  $\textcircled{2} + \textcircled{3} + \textcircled{5} = 10$

17. Underline the difference.  $11 - 4 = \underline{7}$

Lesson 12

Write the twin facts.

18. 
$$\begin{array}{r} 8 \\ +3 \\ \hline 11 \end{array}$$
 
$$\begin{array}{|c|} \hline 3 \\ \hline +8 \\ \hline 11 \\ \hline \end{array}$$

$$\begin{array}{r} 7 \\ +4 \\ \hline 11 \end{array}$$
 
$$\begin{array}{|c|} \hline 4 \\ \hline +7 \\ \hline 11 \\ \hline \end{array}$$

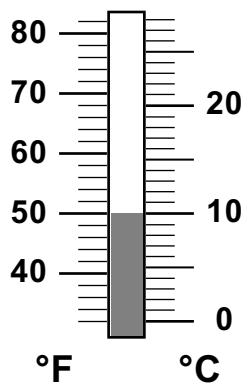
$$\begin{array}{r} 4 \\ +5 \\ \hline 9 \end{array}$$
 
$$\begin{array}{|c|} \hline 5 \\ \hline +4 \\ \hline 9 \\ \hline \end{array}$$

Write the temperature for F and C.

Write a small circle for the degree mark.

19.

50°F



10°C

Write the differences.

20. 
$$\begin{array}{r} 10 \\ -8 \\ \hline \end{array}$$
 
$$\begin{array}{r} 8 \\ -6 \\ \hline \end{array}$$
 
$$\begin{array}{r} 6 \\ -4 \\ \hline \end{array}$$
 
$$\begin{array}{r} 5 \\ -3 \\ \hline \end{array}$$
 
$$\begin{array}{r} 9 \\ -7 \\ \hline \end{array}$$
 
$$\begin{array}{r} 7 \\ -5 \\ \hline \end{array}$$

2   2   2   2   2   2

Write the number sentence.

21. Seven plus three equals ten. 7 + 3 = 10

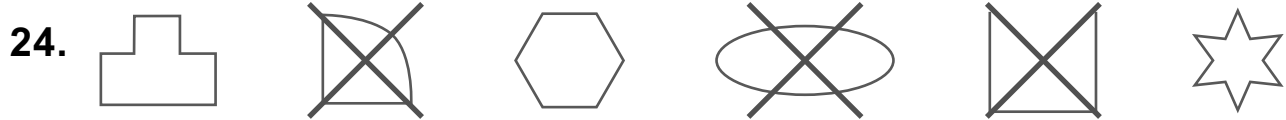
Write the numbers that come before and after.

22. 44 45 46   126 127 128

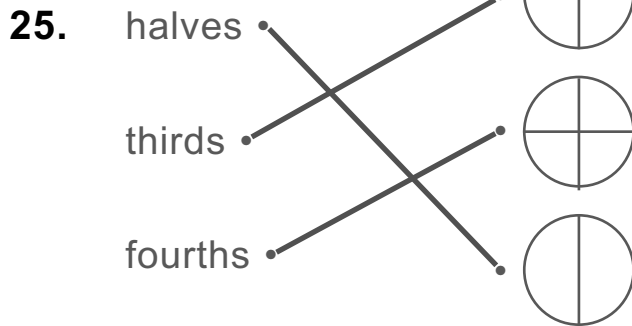
Write two numbers that come between.

23. 234 235 236 237

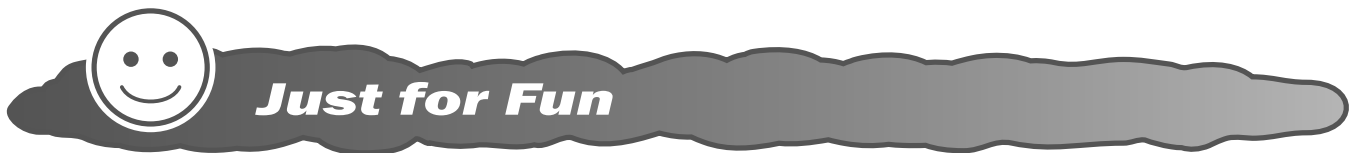
Cross out the shapes that are not polygons.



Match.



Circle  $\frac{1}{2}$  of the gingerbread men.



There is a treasure hidden here. To find out what it is, color every hexagon that has a zero in the tens place.

