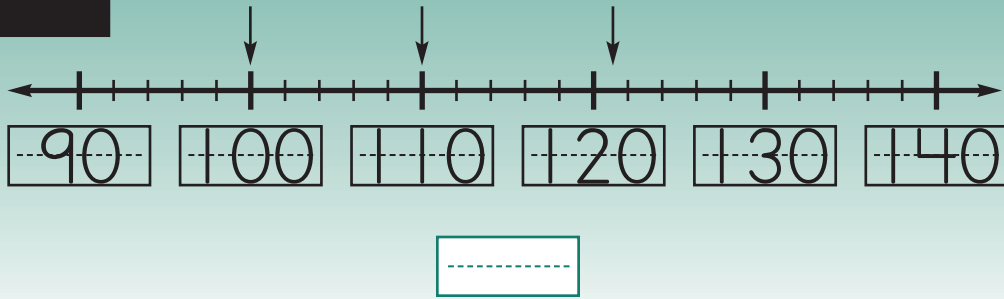


121

One Hundred Twenty-one



1

**+ New
= Fact**

$9 + 3 = \boxed{\text{-----}}$

$3 + 9 = \boxed{\text{-----}}$



2

**Story
Problem**





Ken wanted to put 25¢ into the offering basket on Sunday. He found these coins in his bank. **Circle the coins that he could use to make 25¢.**



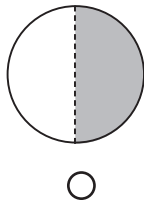
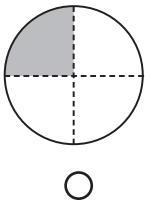
3



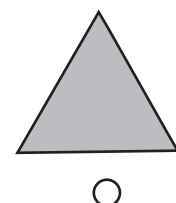
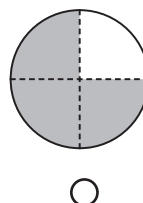
4 Match.



5 Mark the ○ with $\frac{1}{4}$ shaded.



Mark the ○ with 1 whole shaded.



I Can Do This

6

$4 + 6 = \underline{\quad}$

$11 - 6 = \underline{\quad}$

$3 + 9 = \underline{\quad}$

$10 - 3 = \underline{\quad}$

$11 - 7 = \underline{\quad}$

$5 + 5 = \underline{\quad}$

$11 - 5 = \underline{\quad}$

$6 + 5 = \underline{\quad}$

Lesson 121

7

$\begin{array}{r} 11 \\ -6 \\ \hline \\ \hline \end{array}$	$\begin{array}{r} 4 \\ +7 \\ \hline \\ \hline \end{array}$	$\begin{array}{r} 10 \\ -5 \\ \hline \\ \hline \end{array}$	$\begin{array}{r} 2 \\ +9 \\ \hline \\ \hline \end{array}$	$\begin{array}{r} 11 \\ -9 \\ \hline \\ \hline \end{array}$	$\begin{array}{r} 3 \\ +8 \\ \hline \\ \hline \end{array}$	$\begin{array}{r} 11 \\ -4 \\ \hline \\ \hline \end{array}$	$\begin{array}{r} 9 \\ +2 \\ \hline \\ \hline \end{array}$
---	--	---	--	---	--	---	--

8 Write $<$, $>$, or $=$.

$389 \square 391$

$127 \square 117$

$343 \square 334$

9 Write the sums.

$3 + 2 + 4 = \underline{\quad}$

$3 + 2 + 6 = \underline{\quad}$

$4 + 3 + 4 = \underline{\quad}$

10

How many? $\underline{\quad}$ $\underline{\quad}$ $\underline{\quad}$

11

$9 + 3 = \underline{\quad}$	$11 - 8 = \underline{\quad}$
$11 - 3 = \underline{\quad}$	$8 + 3 = \underline{\quad}$
$5 + 6 = \underline{\quad}$	$10 - 4 = \underline{\quad}$
$11 - 2 = \underline{\quad}$	$7 + 4 = \underline{\quad}$

.....

$10 - 5 = 5$

.....

122

One Hundred Twenty-two



1



$12 - 9 = \boxed{\text{-----}}$

$12 - 3 = \boxed{\text{-----}}$

2



Last week Mother told Tommy they would leave for Grandpa's in 11 days. That was 7 days ago. How many days is it until they leave?

 days

3



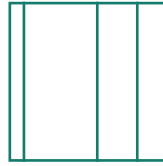
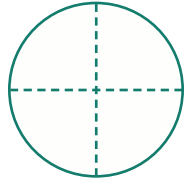
7	9	19
<u> 2</u>	<u> 2</u>	<u> 2</u>
-----	-----	-----
-----	-----	-----



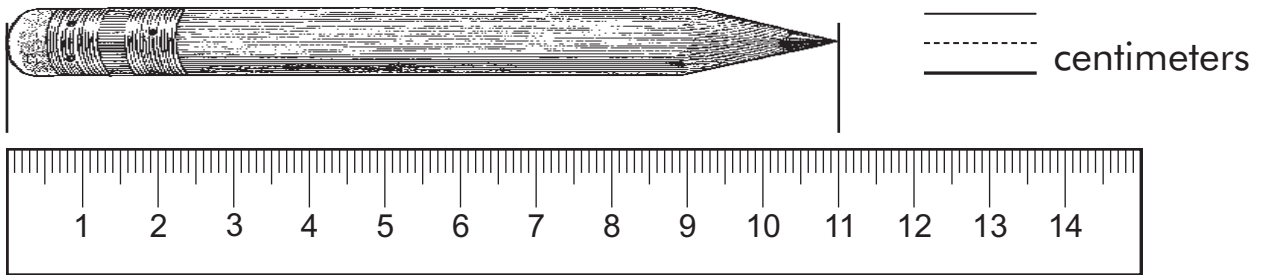
5	7	13
<u> 2</u>	<u> 2</u>	<u> 2</u>
-----	-----	-----
-----	-----	-----

Lesson 122

4 Circle the shape that is divided into fourths.



5



I Can Do This

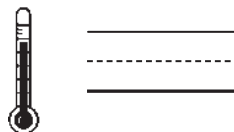
6

$\begin{array}{r} 12 \\ -9 \\ \hline \\ \hline \\ \hline \end{array}$	$\begin{array}{r} 3 \\ +9 \\ \hline \\ \hline \\ \hline \end{array}$	$\begin{array}{r} 11 \\ -6 \\ \hline \\ \hline \\ \hline \end{array}$	$\begin{array}{r} 5 \\ +6 \\ \hline \\ \hline \\ \hline \end{array}$	$\begin{array}{r} 11 \\ -8 \\ \hline \\ \hline \\ \hline \end{array}$	$\begin{array}{r} 2 \\ +9 \\ \hline \\ \hline \\ \hline \end{array}$	$\begin{array}{r} 11 \\ -3 \\ \hline \\ \hline \\ \hline \end{array}$	$\begin{array}{r} 3 \\ +8 \\ \hline \\ \hline \\ \hline \end{array}$
---	--	---	--	---	--	---	--

7 Order the numbers.

533	537	529	541
<u> </u>	<u> </u>	<u> </u>	<u> </u>
<u> </u>	<u> </u>	<u> </u>	<u> </u>

8 Write the temperature.



9

$$\begin{array}{r} 10 \\ -6 \\ \hline \\ \hline \end{array}$$

$$\begin{array}{r} 8 \\ +3 \\ \hline \\ \hline \end{array}$$

$$\begin{array}{r} 11 \\ -9 \\ \hline \\ \hline \end{array}$$

$$\begin{array}{r} 4 \\ +7 \\ \hline \\ \hline \end{array}$$

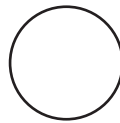
$$\begin{array}{r} 11 \\ -4 \\ \hline \\ \hline \end{array}$$

$$\begin{array}{r} 6 \\ +5 \\ \hline \\ \hline \end{array}$$

$$\begin{array}{r} 11 \\ -5 \\ \hline \\ \hline \end{array}$$

$$\begin{array}{r} 9 \\ +3 \\ \hline \\ \hline \end{array}$$

10 Match.



Circle

Sphere

Cube

Square

11 Write the answers. Watch the signs.

$$\begin{array}{r} 2 \ 4 \\ +2 \ 4 \\ \hline \\ \hline \end{array}$$

$$\begin{array}{r} 7 \ 9 \\ - \ 7 \\ \hline \\ \hline \end{array}$$

$$\begin{array}{r} 2 \ 3 \ 0 \\ +7 \ 1 \ 8 \\ \hline \\ \hline \end{array}$$

$$\begin{array}{r} 1 \ 3 \\ 5 \ 4 \\ +1 \ 2 \\ \hline \\ \hline \end{array}$$

$$\begin{array}{r} 1 \ 3 \\ 2 \ 2 \\ +5 \ 4 \\ \hline \\ \hline \end{array}$$

12

$10 - 7 = \underline{\quad}$

$6 + 4 = \underline{\quad}$

$12 - 3 = \underline{\quad}$

$3 + 9 = \underline{\quad}$

$7 + 4 = \underline{\quad}$

$11 - 2 = \underline{\quad}$

.....

$9 + 2 = \underline{\quad}$

$11 - 7 = \underline{\quad}$



$9 + 2 = 11$

.....

123

One Hundred Twenty-three



1

Story Problem



Peter, James, and John were 3 of Jesus' helpers. Jesus also had 9 other helpers. How many helpers did He have?

_____ □ _____ □ _____

_____ disciples

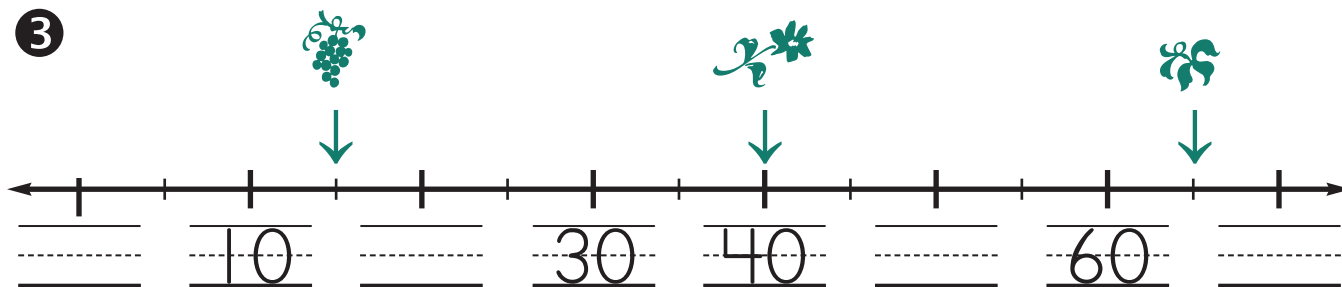


I Can Do This

2

$\begin{array}{r} 12 \\ - 9 \\ \hline \end{array}$	$\begin{array}{r} 9 \\ + 3 \\ \hline \end{array}$	$\begin{array}{r} 10 \\ - 3 \\ \hline \end{array}$	$\begin{array}{r} 4 \\ + 6 \\ \hline \end{array}$	$\begin{array}{r} 11 \\ - 2 \\ \hline \end{array}$	$\begin{array}{r} 8 \\ + 3 \\ \hline \end{array}$	$\begin{array}{r} 11 \\ - 7 \\ \hline \end{array}$	$\begin{array}{r} 6 \\ + 5 \\ \hline \end{array}$
_____	_____	_____	_____	_____	_____	_____	_____

3



How many?







4

$$4 + 7 = \underline{\quad}$$

$$11 - 8 = \underline{\quad}$$

$$5 + 5 = \underline{\quad}$$

$$12 - 3 = \underline{\quad}$$

$$11 - 5 = \underline{\quad}$$

$$9 + 3 = \underline{\quad}$$


$$10 - 4 = \underline{\quad}$$

$$3 + 8 = \underline{\quad}$$

5







6

$$\begin{array}{r} 2 \ 2 \ 3 \\ + 6 \ 4 \ 6 \\ \hline \end{array}$$

$$\begin{array}{r} 9 \ 9 \\ - 1 \ 5 \\ \hline \end{array}$$


$$\begin{array}{r} 5 \ 8 \\ - 4 \ 5 \\ \hline \end{array}$$

$$\begin{array}{r} 3 \ 2 \\ + 6 \ 2 \\ \hline \end{array}$$

$$\begin{array}{r} \ 3 \\ + \ 4 \\ \hline \end{array}$$

Lesson 123

7 Measure the turtle from nose to tail in centimeters.



_____ centimeters

8 Write the missing numbers.

$$\begin{array}{r} \text{---} \\ \text{---} \\ - 4 \\ \hline 6 \end{array}$$

$$\begin{array}{r} \text{---} \\ + 7 \\ \hline 10 \end{array}$$

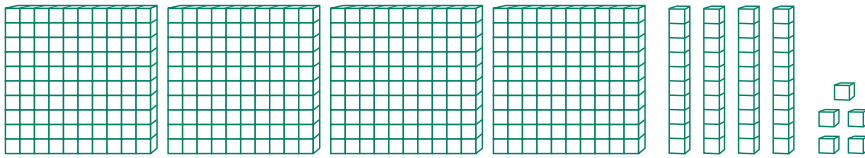
$$\begin{array}{r} \text{---} \\ + 4 \\ \hline 10 \end{array}$$

$$\begin{array}{r} 10 \\ - 3 \\ \hline \text{---} \end{array}$$

$$\begin{array}{r} \text{---} \\ + 5 \\ \hline 10 \end{array}$$

$$\begin{array}{r} 9 \\ + 2 \\ \hline \text{---} \end{array}$$

9 Write $<$, $>$, or $=$.



hundreds	tens	ones
4	4	3

10

$$\begin{array}{r} 11 \\ - 4 \\ \hline \text{---} \\ \text{---} \end{array}$$

$$\begin{array}{r} 3 \\ + 9 \\ \hline \text{---} \\ \text{---} \end{array}$$

$$\begin{array}{r} 11 \\ - 9 \\ \hline \text{---} \\ \text{---} \end{array}$$

$$\begin{array}{r} 12 \\ - 9 \\ \hline \text{---} \\ \text{---} \end{array}$$

$$\begin{array}{r} 5 \\ + 6 \\ \hline \text{---} \\ \text{---} \end{array}$$

$$\begin{array}{r} 11 \\ - 6 \\ \hline \text{---} \\ \text{---} \end{array}$$

$$\begin{array}{r} 7 \\ + 4 \\ \hline \text{---} \\ \text{---} \end{array}$$

$$\begin{array}{r} 11 \\ - 3 \\ \hline \text{---} \\ \text{---} \end{array}$$

.....

$11 - 2 = 9$

.....