

57

Fifty-seven

$$\boxed{\text{---}} = \boxed{\text{---}} \text{ tens} + \boxed{\text{---}} \text{ ones}$$

1

**+ New
= Facts**

$3 + 4 = \boxed{\text{---}}$

$4 + 3 = \boxed{\text{---}}$

2

**Story
Problem**

$\boxed{\text{---}}$	$\boxed{\text{---}}$	$\boxed{\text{---}}$	$\boxed{\text{---}}$	$\boxed{\text{---}}$
----------------------	----------------------	----------------------	----------------------	----------------------

$\boxed{\text{---}}$ years old

3

Order the numbers.

105, 132, 128

_____	_____	_____
-----	-----	-----
_____	_____	_____

110, 93, 68

_____	_____	_____
-----	-----	-----
_____	_____	_____

4

Read these numbers aloud to your teacher.





I Can Do This

5 < or >



7

$3 + 2 + 2 = \underline{\quad}$

$1 + 1 + 4 = \underline{\quad}$

$4 + 1 + 2 = \underline{\quad}$

6

$$\begin{array}{r} 4 \\ + 2 \\ \hline \end{array}$$

$$\begin{array}{r} 6 \\ - 3 \\ \hline \end{array}$$

$$\begin{array}{r} 7 \\ - 1 \\ \hline \end{array}$$

$$\begin{array}{r} 3 \\ + 3 \\ \hline \end{array}$$

$$\begin{array}{r} 6 \\ + 1 \\ \hline \end{array}$$


$$\begin{array}{r} 6 \\ - 4 \\ \hline \end{array}$$

$$\begin{array}{r} 7 \\ - 2 \\ \hline \end{array}$$

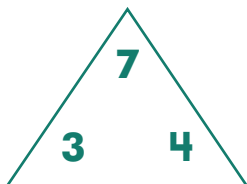
$$\begin{array}{r} 1 \\ + 6 \\ \hline \end{array}$$

$$\begin{array}{r} 2 \\ + 5 \\ \hline \end{array}$$

8



9



$$\boxed{\quad} + \boxed{\quad} = \boxed{\quad}$$

$$\boxed{\quad} + \boxed{\quad} = \boxed{\quad}$$

$$\boxed{\quad} - \boxed{\quad} = \boxed{\quad}$$

$$\boxed{\quad} - \boxed{\quad} = \boxed{\quad}$$

10

$4 + 3 = \underline{\quad}$

$6 - 5 = \underline{\quad}$

$7 - 5 = \underline{\quad}$

$2 + 4 = \underline{\quad}$

$5 + 2 = \underline{\quad}$

$7 - 6 = \underline{\quad}$

$6 - 2 = \underline{\quad}$

$3 + 4 = \underline{\quad}$

.....

$1 + 6 = 7$



$6 + 1 = 7$

.....




Just for Fun

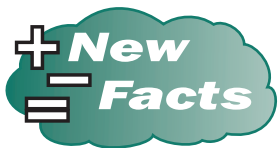
Help Farmer Ron plant more corn. Draw two seeds in each hole.

How many seeds did he plant? $\underline{\quad}$





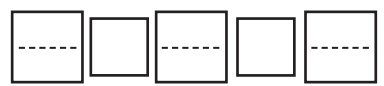
1



$7 - 4 = \square$

$7 - 3 = \square$

2



good nails

3



hundreds	tens	ones

hundreds	tens	ones

hundreds	tens	ones

hundreds	tens	ones

hundreds	tens	ones

hundreds	tens	ones

4

Draw a line.

5 Write the missing numbers.

$$\begin{array}{r} 0 \\ + 5 \\ \hline \end{array}$$

$$\begin{array}{r} \\ - 1 \\ \hline 4 \end{array}$$

$$\begin{array}{r} \\ - \\ \hline 1 \end{array}$$

$$\begin{array}{r} \\ + 4 \\ \hline 4 \end{array}$$

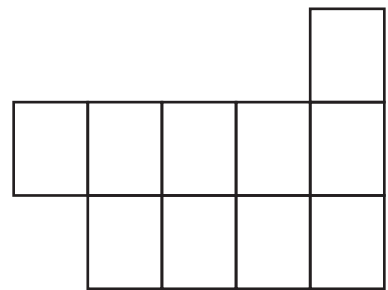
$$\begin{array}{r} 5 \\ - \\ \hline 3 \end{array}$$

$$\begin{array}{r} \\ + 1 \\ \hline 2 \end{array}$$

$$\begin{array}{r} 0 \\ + \\ \hline 3 \end{array}$$

6

Vegetables From the Garden



0 1 2 3 4 5 6 7 8 9 10 11 12 13 14 15 16
Number of vegetables

The graph shows the most of which vegetable?



peppers



carrots



tomatoes

The graph shows the least of which vegetable?



carrots



peppers



tomatoes



I Can Do This

7

$\begin{array}{r} 4 \\ +3 \\ \hline \end{array}$	$\begin{array}{r} 6 \\ -2 \\ \hline \end{array}$	$\begin{array}{r} 3 \\ +4 \\ \hline \end{array}$	$\begin{array}{r} 7 \\ -2 \\ \hline \end{array}$
$\begin{array}{r} \\ \hline \end{array}$	$\begin{array}{r} \\ \hline \end{array}$	$\begin{array}{r} \\ \hline \end{array}$	$\begin{array}{r} \\ \hline \end{array}$
$\begin{array}{r} 7 \\ -6 \\ \hline \end{array}$	$\begin{array}{r} 7 \\ -3 \\ \hline \end{array}$	$\begin{array}{r} 2 \\ +4 \\ \hline \end{array}$	$\begin{array}{r} 6 \\ -5 \\ \hline \end{array}$
$\begin{array}{r} \\ \hline \end{array}$	$\begin{array}{r} \\ \hline \end{array}$	$\begin{array}{r} \\ \hline \end{array}$	$\begin{array}{r} \\ \hline \end{array}$

8 Write $<$ or $>$.

124 160

62 48

90 120

9 Order the numbers.

100, 55, 135

_____	_____	_____
-----	-----	-----
_____	_____	_____

111, 130, 141

_____	_____	_____
-----	-----	-----
_____	_____	_____

10

$7 - 4 =$ _____

$7 - 1 =$ _____

$5 + 2 =$ _____

$4 + 2 =$ _____

$2 + 5 =$ _____


$7 - 5 =$ _____

$6 - 3 =$ _____

$3 + 3 =$ _____

$6 - 4 =$ _____

11



.....
:00

.....

$6 - 5 = 1$



.....



Just for Fun

Add 1 to each number.

