

3

Daniel prayed to God three times a day.



- Count by 10's from 153 to 243.**
- Count backward by 100's from 1,000 to 100.**



- Practice your H and $\times 0$ flash cards for 5 minutes.**
- Do Speed Drill 3 on page 79.**



- Record your score in the graph on page 77.**

More About Number Sentences

Sometimes there is a problem to solve on each side of the sign in a number sentence.

$$\begin{array}{ccc} \boxed{9} & & \boxed{10} \\ 6 + 3 & \boxed{<} & 4 + 6 \end{array}$$

Think! Six plus three equals nine. Write a 9 in the box above $6+3$.

Four plus six equals ten. Write a 10 in the box above $4+6$.

Is 9 less than 10, greater than 10, or equal to 10? Nine is less than 10. Write the *less than* sign.

NEW

NEW

Write the answers in the boxes. Then write $<$, $>$, or $=$.

1. $\overset{\boxed{7}}{5} + 2 \overset{\boxed{6}}{>} 3 + 3$ $9 \times \overset{\boxed{0}}{0} \overset{\boxed{2}}{<} 2 \times 1$ $7 - \overset{\boxed{4}}{3} \overset{\boxed{4}}{=} 10 - 6$

2. $\overset{\boxed{9}}{3} + 6 \overset{\boxed{9}}{=} 8 + 1$ $1 \times \overset{\boxed{5}}{5} \overset{\boxed{4}}{>} 5 - 1$ $3 - \overset{\boxed{0}}{3} \overset{\boxed{1}}{<} 9 - 8$

 **We Remember**



3. Miss Mary bought a *Treasury of Bible Topics* to use for devotions at school. It cost \$8.50. She gave the clerk \$10.50. How much change did Miss Mary get back?

\$2.00

Solution

$\begin{array}{r} \$10.50 \\ - 8.50 \\ \hline \$2.00 \end{array}$

Write the answers.

4.
$$\begin{array}{r} 43 \\ + 36 \\ \hline 79 \end{array}$$

$$\begin{array}{r} \overset{79}{80}1 \\ - 554 \\ \hline 247 \end{array}$$

$$\begin{array}{r} 44 \\ + 20 \\ \hline 64 \end{array}$$

$$\begin{array}{r} 789 \\ - 23 \\ \hline 766 \end{array}$$

$$\begin{array}{r} 231 \\ + 706 \\ \hline 937 \end{array}$$

5.
$$\begin{array}{r} | \\ 488 \\ + 361 \\ \hline 849 \end{array}$$

$$\begin{array}{r} | \\ 137 \\ + 80 \\ \hline 217 \end{array}$$

$$\begin{array}{r} | \\ 56 \\ + 17 \\ \hline 73 \end{array}$$

$$\begin{array}{r} | | \\ 549 \\ + 398 \\ \hline 947 \end{array}$$

$$\begin{array}{r} | | \\ 678 \\ + 145 \\ \hline 823 \end{array}$$

Lesson 3

Borrow twice.

$$\begin{array}{r} 6 \text{ } 14 \text{ } 1 \\ 7 \cancel{5} 3 \\ - 686 \\ \hline 67 \end{array}$$

$$\begin{array}{r} 4 \text{ } 14 \text{ } 1 \\ \cancel{5} \cancel{5} 6 \\ - 77 \\ \hline 479 \end{array}$$

$$\begin{array}{r} 5 \text{ } 14 \text{ } 1 \\ \cancel{6} \cancel{5} 0 \\ - 378 \\ \hline 272 \end{array}$$

$$\begin{array}{r} 8 \text{ } 12 \text{ } 1 \\ \cancel{9} \cancel{3} 7 \\ - 258 \\ \hline 679 \end{array}$$

$$\begin{array}{r} 4 \text{ } 13 \text{ } 1 \\ \cancel{5} \cancel{4} 2 \\ - 375 \\ \hline 167 \end{array}$$

Write the missing number.

$$\begin{array}{l} 7. \quad n = 3 + 4 \\ \quad \quad n = \underline{7} \end{array}$$

$$\begin{array}{l} 10 - n = 8 \\ n = \underline{2} \end{array}$$

$$\begin{array}{l} n + 6 = 12 \\ n = \underline{6} \end{array}$$

Circle true or false.

8. 1 litre = a little more than 1 quart

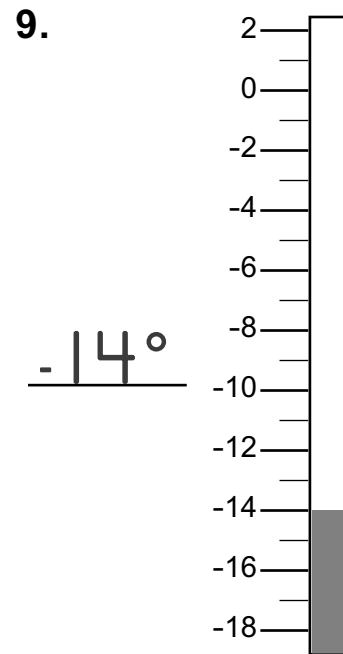
true false

Fill in the blanks.

10. 1 kilogram = 1,000 grams

11. 1 week = 7 days

Write the temperature.



Write the tens that come before and after.

Circle the ten that is nearer.

12. 30 37 40

10 18 20

50 56 60

Circle the problems that have equal sums.

13. $2 + 2 + 3 + 8$

$5 + 4 + 3 + 7$

$3 + 4 + 7 + 5$

14. $9 + 2 + 3 + 8$

$2 + 3 + 4 + 8$

$9 + 8 + 3 + 2$

Multiply.

15.	10	10	10	8	6	10	10	4	9
	$\times 5$	$\times 2$	$\times 7$	$\times 10$	$\times 10$	$\times 10$	$\times 3$	$\times 10$	$\times 10$
	<u>50</u>	<u>20</u>	<u>70</u>	<u>80</u>	<u>60</u>	<u>100</u>	<u>30</u>	<u>40</u>	<u>90</u>

Write the numbers.

16. four thousand five hundred sixteen 4,51617. nine thousand thirty-four 9,03418. six thousand seven 6,007

Write the next two times for the pattern.

19. 8:00 8:15 8:30 8:45 9:00

20.	6	13	7	5	13	8	13	13
	$\boxed{+ 7}$	$\boxed{- 8}$	$\boxed{+ 6}$	$\boxed{+ 8}$	$\boxed{- 5}$	$\boxed{+ 5}$	$\boxed{- 6}$	$\boxed{- 7}$
	<u>13</u>	<u>5</u>	<u>13</u>	<u>13</u>	<u>8</u>	<u>13</u>	<u>7</u>	<u>6</u>

Lesson 3


Write the amount.

21.




What time is it?


22.



7:50



10:11



4:00

Count the tally marks.

23.  = 29

Write the next three numbers.

24. 4 8 12 16 20 24 28 32

Fill in the blank.

25. The answer to an addition problem is called a sum.