

7

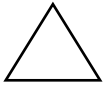
Ice is lighter than water.
It stays on top of lakes
and ponds.



- Count forward and backward by 4's to 40.**
- Count backward by 1's from 30 to 1.**



- Practice your K and M flash cards for 5 minutes.**
- Do Speed Drill 7 on page 82.**



- Record your score on page 78.**

Reading Thousands

Each number below has a comma. It is the thousand (thaü'•zænd) comma.

The comma helps us read these numbers.

Read the number before the comma. Say **thousand** for the comma.

1,000	3,000	2,000
one thousand	three thousand	two thousand

Read these numbers to your teacher.

△ 1. 3,000 1,000 8,000 9,000 6,000

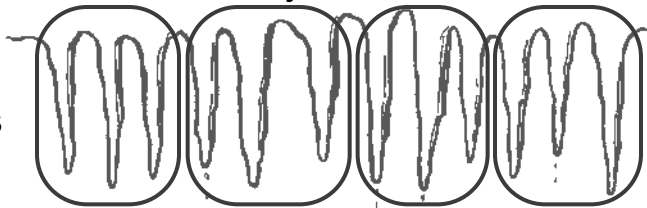
Lesson 7

 **We Remember**



2. Twelve icicles were hanging from the front porch. James broke off $\frac{1}{4}$ of them. How many icicles did James break off?

3 icicles



3.


$\begin{array}{r} 37 \\ + 52 \\ \hline 89 \end{array}$	$\begin{array}{r} 82 \\ + 15 \\ \hline 97 \end{array}$	$\begin{array}{r} 137 \\ + 490 \\ \hline 627 \end{array}$	$\begin{array}{r} 137 \\ + 481 \\ \hline 618 \end{array}$	$\begin{array}{r} 498 \\ - 31 \\ \hline 467 \end{array}$	$\begin{array}{r} 4 \\ 1 \\ 2 \\ + 8 \\ \hline 15 \end{array}$
--	--	---	---	--	--

Solve. Borrow when needed. Add to check the last one.

4.

$\begin{array}{r} 7 \cancel{8} 5 \\ - 36 \\ \hline 49 \end{array}$	$\begin{array}{r} 5 \cancel{6} 2 \\ - 13 \\ \hline 49 \end{array}$	$\begin{array}{r} 5 \cancel{6} 5 \\ - 9 \\ \hline 56 \end{array}$	$\begin{array}{r} 79 \\ - 25 \\ \hline 54 \end{array}$	$\begin{array}{r} 54 \\ + 25 \\ \hline 79 \end{array}$
--	--	---	--	--

The horizontal bar graph shows how many bright stars are in each of these star pictures in the winter sky.



5. How many bright stars are in the Twins?
- 6
6. How many more bright stars are in Orion than in the Big Dipper?

8

Answer the questions. Then write a multiplication sentence.

7. How many rows? 3

8. How many candles in each row? 4

9. How many candles in all? 12

3 groups of 4 equal 12

$$\underline{3 \times 4 = 12}$$



10.

$$\begin{array}{r} 5 \\ + 8 \\ \hline 13 \end{array}$$

$$\begin{array}{r} 13 \\ - 7 \\ \hline 6 \end{array}$$

$$\begin{array}{r} 13 \\ - 5 \\ \hline 8 \end{array}$$

$$\begin{array}{r} 6 \\ + 7 \\ \hline 13 \end{array}$$

$$\begin{array}{r} 8 \\ + 5 \\ \hline 13 \end{array}$$

$$\begin{array}{r} 13 \\ - 8 \\ \hline 5 \end{array}$$

$$\begin{array}{r} 7 \\ + 6 \\ \hline 13 \end{array}$$

$$\begin{array}{r} 13 \\ - 6 \\ \hline 7 \end{array}$$

-9

11.

$$\begin{array}{r} 11 \\ - 9 \\ \hline 2 \end{array}$$

$$\begin{array}{r} 13 \\ - 9 \\ \hline 4 \end{array}$$

$$\begin{array}{r} 18 \\ - 9 \\ \hline 9 \end{array}$$

$$\begin{array}{r} 15 \\ - 9 \\ \hline 6 \end{array}$$

$$\begin{array}{r} 12 \\ - 9 \\ \hline 3 \end{array}$$

$$\begin{array}{r} 14 \\ - 9 \\ \hline 5 \end{array}$$

$$\begin{array}{r} 16 \\ - 9 \\ \hline 7 \end{array}$$

$$\begin{array}{r} 17 \\ - 9 \\ \hline 8 \end{array}$$

+10

12.

$$53 + 10 = \underline{63}$$

13.

$$6 + 10 = \underline{16}$$

-10

14.

$$35 - 10 = \underline{25}$$

15.

$$29 - 10 = \underline{19}$$

Fill in the blanks.

16. 1 pound = 16 ounces

1 yard = 3 feet

17. before noon = a.m.

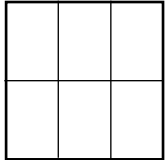

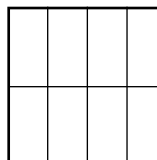
afternoon = p.m.

Lesson 7

Match. Skip count to find the product.

- | | |
|---------------------------|--------------------------------|
| 18. $2+2+2+2+2+2+2+2+2+2$ | $7 \times 4 = \underline{28}$ |
| 19. $5+5+5+5$ | $6 \times 3 = \underline{18}$ |
| 20. $4+4+4+4+4+4+4$ | $10 \times 2 = \underline{20}$ |
| 21. $3+3+3+3+3+3$ | $4 \times 5 = \underline{20}$ |

Match.





- | | | | |
|-----|--|--|--|
| 22. | fifths | sixths | eighths |
| |  |  |  |

Circle the 3rd pair of boots. They belong to James.

23.     

△ Count by ordinal numbers from 1st to 20th.

Order the numbers from largest to smallest.

24.    
- 742 879 342 923

Answer the questions.

25. The first Saturday in January is which day? 4

26. The 2nd Wednesday is which day? 8

January						
Sun	Mon	Tue	Wed	Thu	Fri	Sat
			1	2	3	4
5	6	7	8	9	10	11
12	13	14	15	16	17	18
19	20	21	22	23	24	25
26	27	28	29	30	31	

Circle the correct answer.

27. How many different digits can be used to write any number?

5 100 10 20

28. The picture at the right is a

nickel quarter dime dollar



Circle true or false.

29. We make snowmen in the summer. true false

30. There are 12 months in a year. true false

Use a dollar sign to write the amount.

31.



\$3.25