

9

King Og's bed was
9 cubits
long.



- Count forward and backward by 3's to 30.**
- Count by 10's from 12 to 142.**
- Read these numbers to your teacher.**

6,493 \$27.00 \$25.13 \$3.09 4,023



- Practice your J and $\times 2$ flash cards for 5 minutes.**
- Do Speed Drill 9 on page 82.**



- Record your score in the graph on page 77.**

Mental Addition

Use addition facts to add larger numbers in your head.

$4 + 5 = 9$ so

$14 + 5 = 19$

$14 + 5 = 19$

$3 + 2 = 5$ so

$23 + 2 = 25$

$23 + 2 = 25$

$2 + 6 = 8$ so

$82 + 6 = 88$

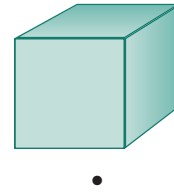
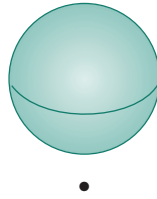
$82 + 6 = 88$

NEW

NEW

Match the name and the solid.

6.



sphere

cube

cylinder

Measure the line segment to one-fourth of an inch.

7.  _____ inches

Write the fact and the sum. Do the adding in your head.



8. $20 + 70 = \underline{\hspace{2cm}}$



$500 + 300 = \underline{\hspace{2cm}}$

Answer each side of the box first. Then write $<$, $>$, or $=$.

9. 2×6 6×2

_____ _____

1×4 $1 + 4$

_____ _____

$3 - 0$ 2×3

_____ _____

Circle the odd numbers.

Draw a square around the even numbers.

10. 49 29 75 80 67 58 19 10 94

Lesson 9



11.
$$\begin{array}{r} 5 \\ + 6 \\ \hline \square \end{array}$$

$$\begin{array}{r} 4 \\ + 7 \\ \hline \square \end{array}$$

$$\begin{array}{r} 11 \\ - 6 \\ \hline \square \end{array}$$

$$\begin{array}{r} 11 \\ - \square \\ \hline 6 \end{array}$$

$$\begin{array}{r} \square \\ + 5 \\ \hline 11 \end{array}$$

$$\begin{array}{r} 11 \\ - 7 \\ \hline \square \end{array}$$

$$\begin{array}{r} 7 \\ + 4 \\ \hline \square \end{array}$$

$$\begin{array}{r} \square \\ - 4 \\ \hline 7 \end{array}$$

Write the answer for n .

12. $n - 9 = 8$ $2 + n = 11$ $n = 16 - 7$ $9 + n = 14$
 $n = \underline{\hspace{2cm}}$ $n = \underline{\hspace{2cm}}$ $n = \underline{\hspace{2cm}}$ $n = \underline{\hspace{2cm}}$

Write the tens that come before and after.

Circle the ten that is nearer.

13. $\underline{\hspace{2cm}}$ 46 $\underline{\hspace{2cm}}$ $\underline{\hspace{2cm}}$ 19 $\underline{\hspace{2cm}}$ $\underline{\hspace{2cm}}$ 23 $\underline{\hspace{2cm}}$

Write the number that is halfway between the tens.

14. 20 $\underline{\hspace{2cm}}$ 30 50 $\underline{\hspace{2cm}}$ 60 30 $\underline{\hspace{2cm}}$ 40

Match.

15. circle •

square •



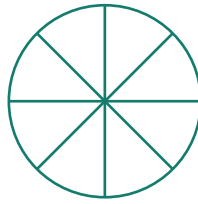
• triangle

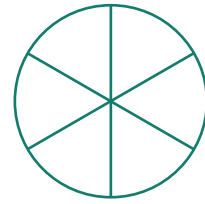
• rectangle

Write *fifths*, *sixths*, or *eighths* under each circle.

16.







Study the pictograph to answer the questions.

Number of Sons

17. How many sons did Jesse have?

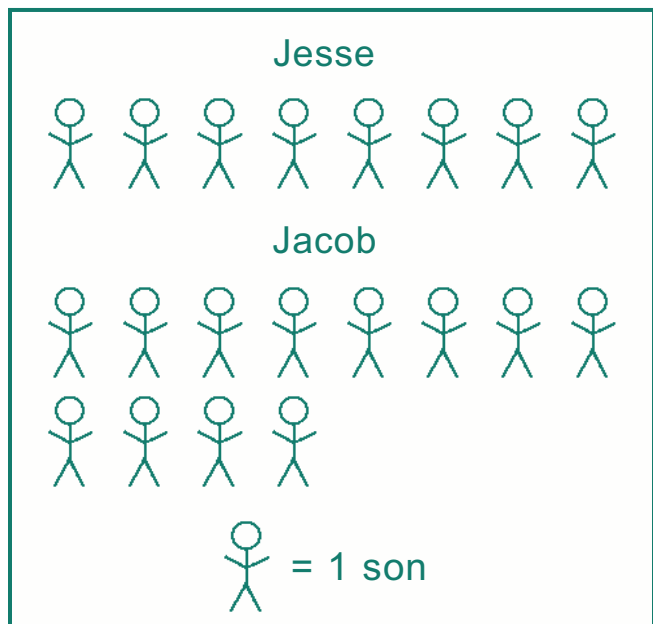
_____ sons

18. How many sons did Jacob have?

_____ sons

19. How many more sons did Jacob have than Jesse?

_____ more sons



Write the number.

20. 1 pint = _____ cups

Write $<$, $>$, or $=$.

21. $0 \square 3 \times 0$

$15 - 8 \square 6$

$10 \square 0 \times 10$