

12

Leopards climb into trees to catch monkeys.



Count by 25's to 400.

Read these numbers to your teacher:

9,023 4,919 4,022 8,096



Practice your I and $\times 10$ flash cards for 5 minutes.

Do Speed Drill 12 on page 83.



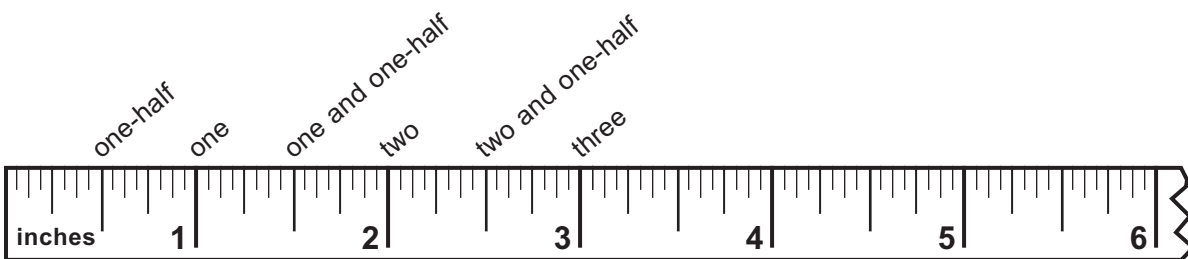
Record your score on page 77.

NEW



Counting by Half Inches

Half-inch marks are halfway between the inch marks. Count by half inches on the ruler.



NEW

Lesson 12

- △ 1. Count by half inches to 12 on your own ruler.



We Remember




2. Lakeview Zoo had 15 gallons of milk in the tank for the baby elephant. In half a day, the elephant drank 12 gallons. A worker then added another 65 gallons of milk to the tank. How much milk was in the tank then?

Solution

Subtract the milk the elephant drank.

Add the milk the worker put into the tank.



_____ gallons of milk

Solve. Carry or borrow as needed.

$$\begin{array}{r} 3. \quad 450 \\ + 289 \\ \hline \end{array}$$

$$\begin{array}{r} 65 \\ + 17 \\ \hline \end{array}$$

$$\begin{array}{r} 27 \\ + 24 \\ \hline \end{array}$$

$$\begin{array}{r} 663 \\ + 276 \\ \hline \end{array}$$

$$\begin{array}{r} 35 \\ 22 \\ + 7 \\ \hline \end{array}$$

$$\begin{array}{r} 4 \\ 2 \\ 3 \\ + 5 \\ \hline \end{array}$$

$$\begin{array}{r} 4. \quad 952 \\ - 417 \\ \hline \end{array}$$

$$\begin{array}{r} 529 \\ - 279 \\ \hline \end{array}$$

$$\begin{array}{r} 329 \\ - 156 \\ \hline \end{array}$$

$$\begin{array}{r} 675 \\ - 547 \\ \hline \end{array}$$

Write the number that is halfway between the tens or hundreds.

5. 50 _____ 60 800 _____ 900 70 _____ 80

Circle the correct weight. Fill in the blank.

6. 1 gram 60 grams
 1 kilogram 15 kilograms




7. 1 kilogram = _____ grams

Write the numbers.

8. two thousand four hundred forty-five _____
 9. five thousand twenty-six _____

Write the hundreds, tens, and ones.






10. _____ hundreds _____ tens _____ ones = _____

Lesson 12

Multiply.

11. $\begin{array}{r} 10 \\ \times 0 \\ \hline \end{array}$ $\begin{array}{r} 22 \\ \times 5 \\ \hline \end{array}$ $\begin{array}{r} 10 \\ \times 1 \\ \hline \end{array}$ $\begin{array}{r} 22 \\ \times 0 \\ \hline \end{array}$ $\begin{array}{r} 7 \\ \times 1 \\ \hline \end{array}$ $\begin{array}{r} 1 \\ \times 9 \\ \hline \end{array}$ $\begin{array}{r} 0 \\ \times 9 \\ \hline \end{array}$ $\begin{array}{r} 80 \\ \times 1 \\ \hline \end{array}$ $\begin{array}{r} 1 \\ \times 1 \\ \hline \end{array}$

What time is it?



12. _____

Write = or \neq .

13. $9 + 7$ 12

1 week 24 days

18 $9 + 9$

Copy and solve.

14. $48 - 25$

$932 + 66$

$789 - 43$

$54 + 4$

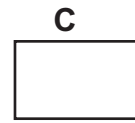
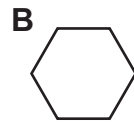
Write *a.m.* or *p.m.*

15. The students left school for Lakeview Zoo at 9:00 _____

16. The students left from Lakeview Zoo at 3:25 _____

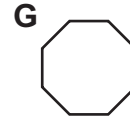
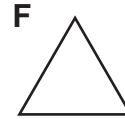
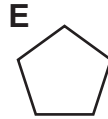
Match.

17. _____ hexagon



18. _____ octagon

19. _____ pentagon



20. _____ oval

21. How much money did James pay to ride to the zoo?
Count the coins below. Write the answer with a dollar sign.



22. 3 9 7 8 10 3 7 9
 + 2 + 2 + 2 + 2 - 2 - 2 - 2 - 2

Write the sum. Write the twin for each fact.

23. 8 7 8
 + 5 _____ + 9 _____ + 6 _____
 _____ _____ _____ _____