

13

Only about half of the children living in Haiti can go to school.



Count forward and backward by 3's to 30.

Count by 25's to 250.



Practice your I and J flash cards for 5 minutes.

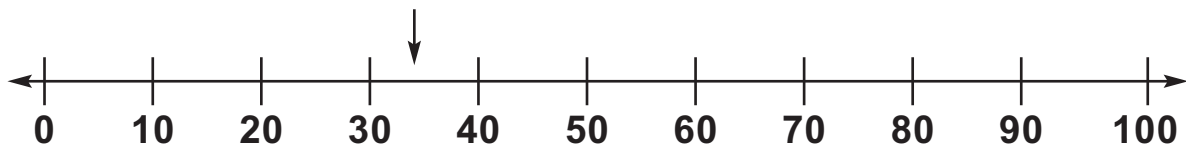
Do Speed Drill 13 on page 84.



Record your score in the graph on page 77.

Between Which Two Tens?

The number line shows tens. The arrow marks 34.



34 is between 30 and 40.

30 34 40

Lesson 13

Write the tens each number comes between.

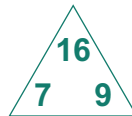
1. _____ 73 _____ _____ 29 _____

2. _____ 38 _____ _____ 56 _____



Remember: For facts that subtract 9, the answer is 1 more than subtracting 10.

$$16 - 7 = 9$$



$$16 - 9 = 7$$

Finish the four related facts.

3. $16 - \square = 7$

$9 + \square = 16$

$16 - \square = \square$

$7 + \square = \square$



4. 7 16 16 9 6 15 16 16
 + 9 - 9 - 7 + 7 + 9 - 6 - 7 - 9
 $\overline{\hspace{1cm}}$ $\overline{\hspace{1cm}}$ $\overline{\hspace{1cm}}$ $\overline{\hspace{1cm}}$ $\overline{\hspace{1cm}}$ $\overline{\hspace{1cm}}$ $\overline{\hspace{1cm}}$ $\overline{\hspace{1cm}}$




5. 27 847 346 \square 37 \square 383 3
 + 62 - 314 + 230 + 59 + 432 + 6
 $\overline{\hspace{1cm}}$ $\overline{\hspace{1cm}}$ $\overline{\hspace{1cm}}$ $\overline{\hspace{1cm}}$ $\overline{\hspace{1cm}}$ $\overline{\hspace{1cm}}$



6. There are 36 inches in a yard. There are 12 inches in a foot. How much longer is a yard than a foot?

_____ inches



Solution

7. James's math book has 77 pages in it. There are 62 pages in his language arts book. How many more pages are in math than in language arts?

_____ pages

Solution

Copy the numbers and write the answers.

8. $263 + 13$

$261 + 11$

$79 - 6$

$566 - 10$

Write a number sentence.

9. Nine plus six equals fifteen. _____

Fill in the blanks.

10. 1 pint = _____ cups

1 quart = _____ cups

Lesson 13

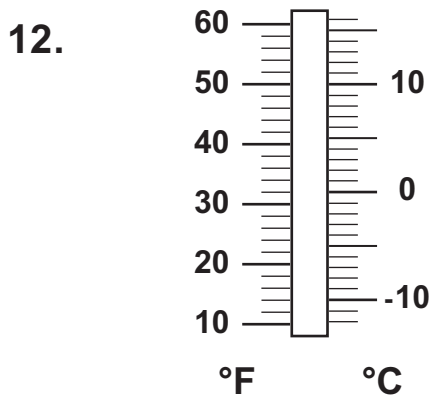
Circle equal groups. Answer the question.

11. Miss Mary checked 6 math tests. $\frac{1}{3}$ of the test scores were 100%. How many tests had scores of 100%?

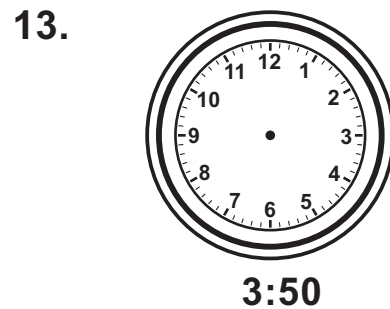
_____ tests



Colour the thermometer to show freezing temperature.



Draw hands on the clock.




Mark the pentagon with a *P*. Mark the hexagons with an *H*.
Mark the octagon with an *O*.



Put an *X* on the oval.




Colour $\frac{1}{4}$ of the square red.



This pictograph shows how many of Miss Mary’s students stayed home with the flu. Study the graph to answer the questions.

Children Missing From School



17. How many students were sick on Monday?

_____ students

18. How many students were absent on Wednesday?

_____ students

19. How many more children were absent on Tuesday than on Friday?

_____ more children

Of the six lunch boxes belonging to the second graders, $\frac{1}{2}$ are blue. Colour $\frac{1}{2}$ of the lunch boxes blue.

20.



Draw coins to show two ways to make 9¢.

21.

22.