

6

- Count by 10's to 100.
- Practice your F flash cards.
- Do Speed Drill 6 on page 68.
- Record your score on the graph on page 65.

I passed the pretest in Lesson 5.

Now I will do the pretest on page 25.

I may also do *Extra Activity Sheet* (1, 2, 3, 4, 5, 6, 7).

I did not pass the pretest in Lesson 5.

I will do all of Lesson 6.

Practice Set – Money

Count the money. Be sure to write the cent or dollar sign.

1. 

2. 

3. 

4. 

5. 

6. 

7. 

8. 

Write the amount in each box. Use the dollar sign.

9. one dollar and fifty-three cents

10. six dollars and ten cents

11. one dollar and fourteen cents

12. thirty-six cents

13. two dollars and forty-three cents

14. nine dollars

Lesson 6

△ Read the amounts in Numbers 9 to 14 to your teacher.

Write the amount in each box.

15.



16.



17.



18.





Just for Fun

Will the rabbit find his way home or get caught by the fox?
Find out by colouring all the squares that equal 10.

3+4	9+1	8+2	3+7	2+1	
7+3		6+1	5+8	6+4	0+10
9+4	5+5	3+2	1+5	6+7	
4+6	8+3	6+8	2+1	0+4	



➤ ➤ ➤ **Pretest – Patterns** ⏪ ⏪ ⏪

Write > or <. (2 points each.) [6]

1. 5 2

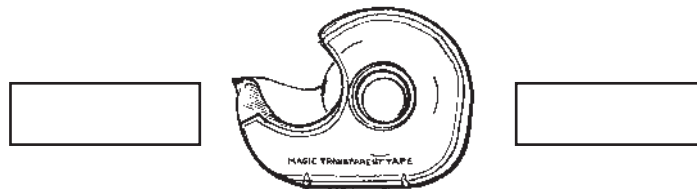
6 7

21 13

Write 261 on the right side of the tape. Write 5 on the left side.

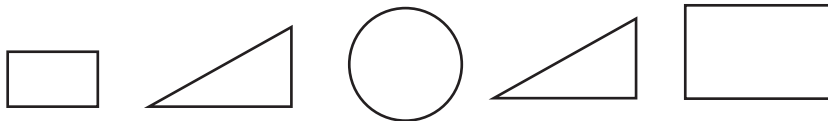
2.

(3 points each.) [6]



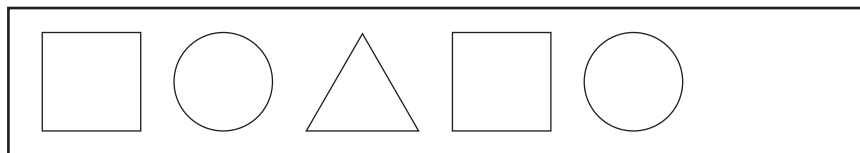
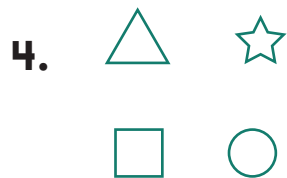
Colour the shapes that are congruent. (6 points.) [6]

3.



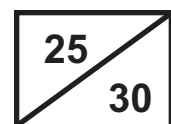
Underline the shape that will come next. (3 points each.) [6]

Draw the shape in the box.



Write numbers to finish the pattern. (2 points each.) [6]

5. 2, 4, 6,



7



- Count by 2's to 20.
- Practice your A flash cards.
- Do Speed Drill 7 on page 69.
- Record your score on the graph on page 65.

I passed the pretest in Lesson 6.

Now I will do the pretest on page 28.

I may also do *Extra Activity Sheet* (1, 2, 3, 4, 5, 6, 7).

I did not pass the pretest in Lesson 6.

I will do all of Lesson 7.

Practice Set – Patterns

Write $>$ or $<$ in each box.

1. 6 3

5 9

29 19

2. 28 24

16 17

25 22

Draw the next shape for the pattern.



Draw two more shapes for the pattern.



Draw the next shape for the pattern.



Write numbers to finish the pattern.



Write 135 on the left side of the glue bottle.

Write 267 on the right side.



Circle the congruent shapes.

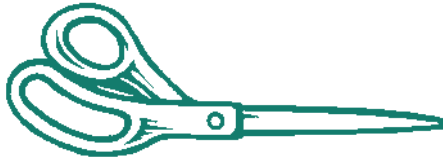


Lesson 7

Write the number that is on the right side of the scissors.

11.

175

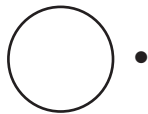


438

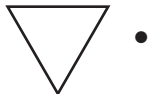
➤ ➤ ➤ **Pretest – Shapes** ⬅ ⬅ ⬅

Match the shapes with the name. (1 point each.) [4]

1.




• square



• circle



• triangle



• rectangle

How many angles does each shape have? Write the answer inside the shape. (1 point each.) [4]

2.

