

7

Many children in the United States attend school at home.



- Count forward and backward by 3's to 21.**
- Count forward and backward by 10's from 8 to 108.**



- Write the numbers your teacher dictates.**

293 706 \$9.00 \$5.02 \$.83 96



- Practice your H and I flash cards for 5 minutes.**
- Do Speed Drill 7 on page 81.**



- Record your score in the graph on page 77.**

NEW

How Many More How Many Fewer

NEW

Joyce has 39 leaves in her leaf collection.
Sarah has 27 leaves in hers. How many more
leaves does Joyce have than Sarah?

12 more leaves

Solution

$\begin{array}{r} 39 \\ -27 \\ \hline 12 \end{array}$

The problem asks **how many more**.

Subtract to find **how many more**.

David has 19 stars on his achievement chart. Mark has 16 stars on his. How many fewer stars does Mark have than David?

3 fewer stars

The problem asks **how many fewer**.

Subtract to find **how many fewer**.

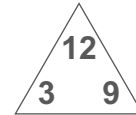
Solution

$$\begin{array}{r} 19 \\ -16 \\ \hline 3 \end{array}$$



Remember: For facts that subtract 9, the answer is 1 more than subtracting 10.

$$\begin{array}{r} 12 \\ -3 \\ \hline 9 \end{array}$$



$$\begin{array}{r} 12 \\ -9 \\ \hline 3 \end{array}$$

Finish the four related facts.

Order may vary.

1. $3 + 9 = 12$

$12 - 9 = 3$

$9 + 3 = 12$

$12 - 3 = 9$



2. $\begin{array}{r} 3 \\ +9 \\ \hline 12 \end{array}$ $\begin{array}{r} 12 \\ -9 \\ \hline 3 \end{array}$ $\begin{array}{r} 12 \\ -3 \\ \hline 9 \end{array}$ $\begin{array}{r} 9 \\ +3 \\ \hline 12 \end{array}$ $\begin{array}{r} 9 \\ +6 \\ \hline 15 \end{array}$ $\begin{array}{r} 11 \\ -9 \\ \hline 2 \end{array}$ $\begin{array}{r} 12 \\ -3 \\ \hline 9 \end{array}$ $\begin{array}{r} 12 \\ -9 \\ \hline 3 \end{array}$



3. $\begin{array}{r} 835 \\ +162 \\ \hline 997 \end{array}$ $\begin{array}{r} 628 \\ -407 \\ \hline 221 \end{array}$ $\begin{array}{r} \square \\ 534 \\ +349 \\ \hline 883 \end{array}$ $\begin{array}{r} \square \\ 695 \\ +152 \\ \hline 847 \end{array}$ $\begin{array}{r} \square \\ 17 \\ +59 \\ \hline 76 \end{array}$ $\begin{array}{r} 1 \\ 4 \\ 4 \\ +7 \\ \hline 16 \end{array}$

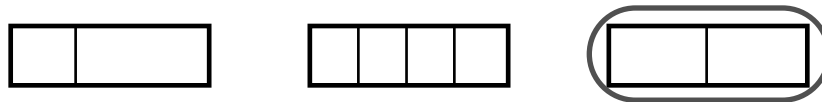
Lesson 7

Make a tally mark for each penny. Then make one for each dime.

Hint: Cross out the coin when you make a tally mark for it.

4.  pennies 
dimes 

Circle the rectangle that is divided into halves.

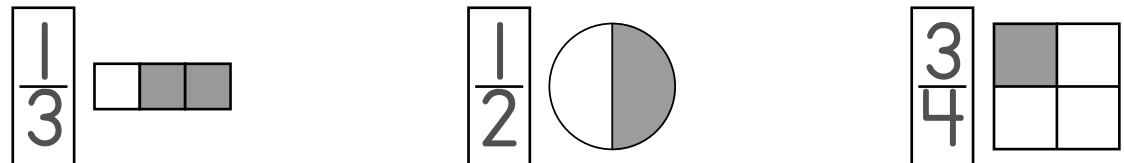
5. 

6. Miss Mary gave Sarah 8 stickers. $\frac{1}{4}$ of them were teddy bears. How many stickers had teddy bears on them?

2 stickers



Write a fraction to tell what part is not shaded.

7. 

Find the sum and write the related facts.

8. Write the sum.
 $3 + 9 = 12$
 Write the twin fact.
 $9 + 3 = 12$

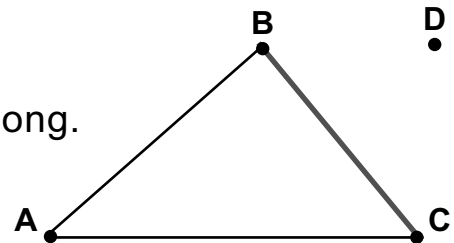
Write the opposite fact.
 $12 - 9 = 3$
 Write the opposite fact.
 $12 - 3 = 9$

Fill in the blanks.

9. 1 year = 12 months 1 yard = 36 inches
 10. 1 week = 7 days 1 yard = 3 feet
 11. 1 quart = 2 pints
 12. Freezing temperature on a Fahrenheit thermometer is 32° .
 13. Freezing temperature on a Celsius thermometer is 0° .

Draw line segment BC. Fill in the blanks.

14. Line segment AC is 5 centimeters long.
 15. Point D is outside the triangle.



Write each amount with a cent sign and a dollar sign.

16.  75¢ \$.75
17.  91¢ \$.91
18.  42¢ \$.42

Write 380 on the right side of the lunch box.

Write 49 on the left side.

19. 49  380

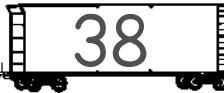
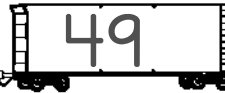
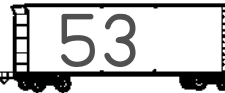
Lesson 7

20. David had 6 quarters. He put $\frac{1}{3}$ of them into the school's missionary bank. How many quarters did David put into the bank?

2 quarters



Order the numbers from smallest to largest.

21. 38 53    

 24 49

22. 425 524    

 245 452

Write the number of angles inside each polygon.

23.    

Write today's date. (Look on your calendar.)

△ 24. _____

 Answer will vary.

Underline the correct name for the coin.

25.  dime nickel penny quarter

Circle the fourth eraser. 26.      