

25

Twenty-five

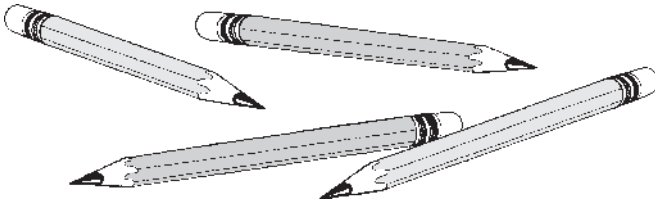


How many starfish?

1

**+ New
= Fact**

$4 - 3 =$

 - = 

2

Story Problem

 - =

brothers

3



→
10

→
20

→

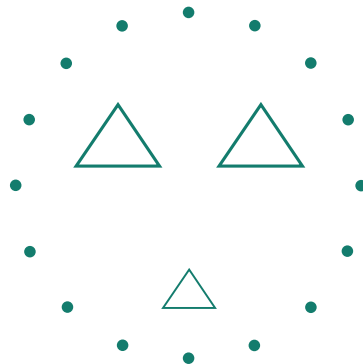
→

→

_____ ¢

4

Do what your teacher tells you.



Lesson 25



tens ones	tens ones	tens ones	tens ones	tens ones

6

$$\begin{array}{r} 4 \\ + 0 \\ \hline \\ \hline \end{array}$$


$$\begin{array}{r} 35 \\ + 0 \\ \hline \\ \hline \end{array}$$

$$\begin{array}{r} 0 \\ + 22 \\ \hline \\ \hline \end{array}$$

$$\begin{array}{r} 1 \\ + 4 \\ \hline \\ \hline \end{array}$$

$$\begin{array}{r} 17 \\ + 1 \\ \hline \\ \hline \end{array}$$

$$\begin{array}{r} 1 \\ + 12 \\ \hline \\ \hline \end{array}$$



7

$$\begin{array}{r} 3 \\ - 2 \\ \hline \\ \hline \end{array}$$

$$\begin{array}{r} 4 \\ - 2 \\ \hline \\ \hline \end{array}$$

$$\begin{array}{r} 3 \\ - 1 \\ \hline \\ \hline \end{array}$$

$$\begin{array}{r} 2 \\ - 1 \\ \hline \\ \hline \end{array}$$

$$\begin{array}{r} 4 \\ - 3 \\ \hline \\ \hline \end{array}$$

8

$$41 - 45$$

9 Underline the number that is less. Trace or write the symbols.

21 $\boxed{>}$ 12

14 $\boxed{}$ 6

8 $\boxed{}$ 19

10 Watch for + or -.

4 - 3 = $\begin{array}{l} \text{---} \\ \text{-----} \\ \text{---} \end{array}$

3 - 2 = $\begin{array}{l} \text{---} \\ \text{-----} \\ \text{---} \end{array}$

4 + 0 = $\begin{array}{l} \text{---} \\ \text{-----} \\ \text{---} \end{array}$

4 - 2 = $\begin{array}{l} \text{---} \\ \text{-----} \\ \text{---} \end{array}$

2 - 1 = $\begin{array}{l} \text{---} \\ \text{-----} \\ \text{---} \end{array}$

3 + 2 = $\begin{array}{l} \text{---} \\ \text{-----} \\ \text{---} \end{array}$

3 - 1 = $\begin{array}{l} \text{---} \\ \text{-----} \\ \text{---} \end{array}$

5 + 0 = $\begin{array}{l} \text{---} \\ \text{-----} \\ \text{---} \end{array}$

11 Write the twins.

	$\boxed{3}$		$\boxed{2}$
	↙ ↘		↙ ↘
$\boxed{+}$	$\boxed{2}$	$\boxed{+}$	$\boxed{3}$
	↙ ↘		↙ ↘
	$\boxed{}$	→	$\boxed{}$

.....

No
New
Facts



.....

	$\boxed{1}$		$\boxed{}$
	↙ ↘		↙ ↘
$\boxed{+}$	$\boxed{3}$	$\boxed{+}$	$\boxed{}$
	↙ ↘		↙ ↘
	$\boxed{}$	→	$\boxed{}$



26

Twenty-six

$$\boxed{\quad} = \boxed{\quad} \text{ tens} + \boxed{\quad} \text{ ones}$$


$$10 + 10 + 1 + 1 + 1 + 1 + 1 + 1 = \boxed{\quad}$$

1

**+
-
=** *New Fact*

$$4 - 1 =$$

$$\boxed{\quad} - \boxed{\quad} = \boxed{\quad}$$



2

 **Story Problem**

$$\boxed{\quad} \boxed{\quad} \boxed{\quad} \boxed{\quad} \boxed{\quad}$$

$\boxed{\quad}$ times


3

$\begin{array}{r} 2 \\ - 1 \\ \hline \end{array}$	$\begin{array}{r} 3 \\ - 1 \\ \hline \end{array}$	$\begin{array}{r} 4 \\ - 1 \\ \hline \end{array}$	$\begin{array}{r} 7 \\ - 1 \\ \hline \end{array}$	$\begin{array}{r} 12 \\ - 1 \\ \hline \end{array}$	$\begin{array}{r} 18 \\ - 1 \\ \hline \end{array}$	$\begin{array}{r} 26 \\ - 1 \\ \hline \end{array}$
$\underline{\quad}$	$\underline{\quad}$	$\underline{\quad}$	$\underline{\quad}$	$\underline{\quad}$	$\underline{\quad}$	$\underline{\quad}$

4 Write the number that is one less.

$\underline{\quad}$		$\underline{\quad}$		$\underline{\quad}$
$\underline{\quad}$	21	$\underline{\quad}$	15	$\underline{\quad}$
$\underline{\quad}$		$\underline{\quad}$		$\underline{\quad}$

5

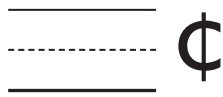


6 Read these numbers aloud to your teacher.



I Can Do This

7



8

$$\begin{array}{r} 3 \\ -1 \\ \hline \hline \end{array}$$

$$\begin{array}{r} 4 \\ -3 \\ \hline \hline \end{array}$$

$$\begin{array}{r} 2 \\ -1 \\ \hline \hline \end{array}$$

$$\begin{array}{r} 4 \\ -2 \\ \hline \hline \end{array}$$

$$\begin{array}{r} 3 \\ -2 \\ \hline \hline \end{array}$$

$$\begin{array}{r} 4 \\ -1 \\ \hline \hline \end{array}$$

9



x =



Lesson 26

⑩ Write the number that is between.

$12 \text{ --- } 14$

$1 \text{ --- } 3$

$7 \text{ --- } 9$

⑪ 46 - 50

⑫ Watch for + or -.

$4 - 1 = \text{ --- }$

$3 - 1 = \text{ --- }$

$0 + 5 = \text{ --- }$

$4 - 3 = \text{ --- }$

$2 - 1 = \text{ --- }$

$4 - 2 = \text{ --- }$

$3 - 2 = \text{ --- }$

$4 + 0 = \text{ --- }$

.....

No
New
Facts

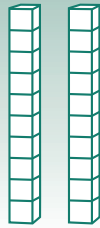


.....



27

Twenty-seven



tens	ones

=



I Can Do This

① 5 | - 5 5

② Watch for + or -.

$$\begin{array}{r} 4 \\ -3 \\ \hline \end{array}$$

$$\begin{array}{r} 4 \\ -1 \\ \hline \end{array}$$

$$\begin{array}{r} 2 \\ -1 \\ \hline \end{array}$$

$$\begin{array}{r} 3 \\ -1 \\ \hline \end{array}$$

$$\begin{array}{r} 4 \\ -2 \\ \hline \end{array}$$

$$\begin{array}{r} 5 \\ +0 \\ \hline \end{array}$$

$$\begin{array}{r} 0 \\ +4 \\ \hline \end{array}$$

$$\begin{array}{r} 3 \\ -2 \\ \hline \end{array}$$

No
New
Facts



28

Twenty-eight

1 **+ New**
= Fact

$5 - 4 =$

2

$\begin{array}{r} 3 \\ -2 \\ \hline \end{array}$	$\begin{array}{r} 2 \\ -1 \\ \hline \end{array}$	$\begin{array}{r} 4 \\ -3 \\ \hline \end{array}$	$\begin{array}{r} 5 \\ -4 \\ \hline \end{array}$	$\begin{array}{r} 9 \\ -8 \\ \hline \end{array}$	$\begin{array}{r} 14 \\ -13 \\ \hline \end{array}$	$\begin{array}{r} 17 \\ -16 \\ \hline \end{array}$
<input type="text"/>	<input type="text"/>	<input type="text"/>	<input type="text"/>	<input type="text"/>	<input type="text"/>	<input type="text"/>


Story Problems

3

nuts


4

apples



5 

6 Do what your teacher tells you.



I Can Do This

7

$\begin{array}{r} 4 \\ -2 \\ \hline \hline \end{array}$	$\begin{array}{r} 3 \\ -2 \\ \hline \hline \end{array}$	$\begin{array}{r} 4 \\ -3 \\ \hline \hline \end{array}$	$\begin{array}{r} 4 \\ -1 \\ \hline \hline \end{array}$	$\begin{array}{r} 3 \\ -1 \\ \hline \hline \end{array}$	$\begin{array}{r} 2 \\ -1 \\ \hline \hline \end{array}$	$\begin{array}{r} 5 \\ -4 \\ \hline \hline \end{array}$
-----	-----	-----	-----	-----	-----	-----
_____	_____	_____	_____	_____	_____	_____

8

$56 - 60$

Lesson 28

9 Write the number that is between.

$$4 \begin{array}{c} \text{---} \\ \text{-----} \\ \text{---} \end{array} 6$$

$$8 \begin{array}{c} \text{---} \\ \text{-----} \\ \text{---} \end{array} 10$$

$$2 \begin{array}{c} \text{---} \\ \text{-----} \\ \text{---} \end{array} 4$$

10 Write the number that is one less.

$$\begin{array}{c} \text{---} \\ \text{-----} \\ \text{---} \end{array} 28$$

$$\begin{array}{c} \text{---} \\ \text{-----} \\ \text{---} \end{array} 12$$

$$\begin{array}{c} \text{---} \\ \text{-----} \\ \text{---} \end{array} 18$$

11 Watch for + or -.

$$5 - 4 = \begin{array}{c} \text{---} \\ \text{-----} \\ \text{---} \end{array}$$

$$3 - 2 = \begin{array}{c} \text{---} \\ \text{-----} \\ \text{---} \end{array}$$

$$4 - 3 = \begin{array}{c} \text{---} \\ \text{-----} \\ \text{---} \end{array}$$

$$3 - 1 = \begin{array}{c} \text{---} \\ \text{-----} \\ \text{---} \end{array}$$

$$0 + 5 = \begin{array}{c} \text{---} \\ \text{-----} \\ \text{---} \end{array}$$

$$4 - 1 = \begin{array}{c} \text{---} \\ \text{-----} \\ \text{---} \end{array}$$

$$2 - 1 = \begin{array}{c} \text{---} \\ \text{-----} \\ \text{---} \end{array}$$

$$4 - 2 = \begin{array}{c} \text{---} \\ \text{-----} \\ \text{---} \end{array}$$

12



_____ ¢

.....

No
 New
 Facts



.....

